

KAMPALA QUALITY PRIMARY SCHOOL

P. 6 REMEDIAL REVISION SET 4, 2020

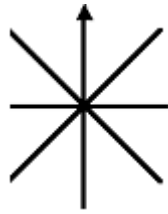
SOCIAL STUDIES

Time allowed: 2 hours 15 minutes

Name: _____ Stream: _____

SECTION A (40 marks)

1. Name the South East point on the compass direction below.



2. Which governor of the Equatorial province tried to conquer Bunyoro for Egypt?

3. Name the body that conducts elections in Uganda.

4. Why did the British ask the Acholi to register their guns?

5. Why is the Uganda national flag sometimes flown at half-mast?

6. Who was the first African to represent Western Uganda in the Legco?

7. Which type of tax is **"Pay as You Earn"**?

8. Name the type of education that the missionaries introduced in Uganda.

9. Which cash crop is used for making insecticides?

10. What is a national constitution?

11. Why is Ignatius Kangave Musaaazi remembered in the political history of Uganda?

12. Name the Symbol of Uganda as a nation shown below.



13. Why does Arabica coffee grow well on the slopes of Mt Elgon?

14. Mention the European explorer who named Mt. Rwenzori "Mountains of the Moon"

15. Why is tourism referred to as an industry?

16. State one duty of a good citizen of Uganda.

17. What was the partition of Africa?

18. Which society sent most explorers to Uganda?


19. By what process was the rift valley formed?

20. How was Semei Kakungulu helpful to the British colonialists in Uganda?

21. Draw a map symbol for a wetland in the space below.



Study the diagram below and use it to answer questions 22 – 25.



22. Name the type of rainfall shown above.
-
23. How do trees in the diagram contribute to the formation of the above type of rainfall?
-
24. Why does evaporation take place at w?
-
25. Name one district that receives the above type of rainfall.
-
26. Name one traditional leader who resisted British rule in Uganda.
-
27. How are feeder roads important to people in rural areas?
-
-
28. Name one tribe of the Highland Nilotes in Uganda.
-

29. Name the trading company that ruled Uganda and Kenya on behalf of the British.

30. Name the last colonial flag to be used in Uganda.

31. Why did IBEACo close its trading posts in Uganda.

32. Why should each school have prefects?

33. What is a national budget?

34. Give one way the IBEACo. Was important to the CMS missionaries in Uganda.

35. Mention one problem P.5 children face on the way to School.

36. Why did the Bantu settle in areas near lakes and rivers?

37. How are longitudes and latitudes important to a map-reader?

38. Mention one method used by people to preserve fish.

39. How does the government of Uganda get most of her revenue?

40. Give one way a phone is similar to a bank.

SECTION B (60 marks)

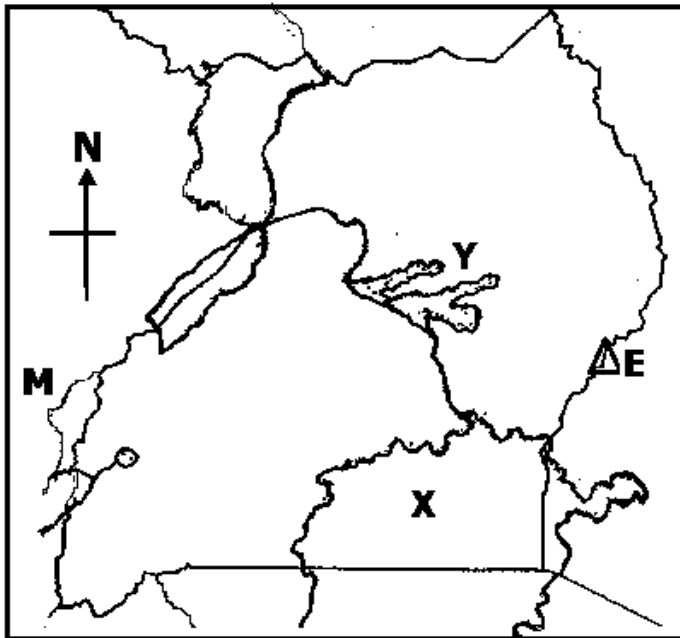
41(a) State the main reason for the coming of the European explorers to Uganda.

(b) Name the explorer who entered Uganda from South Sudan.

(c) Who was the Kabaka of Buganda at the time John Speke arrived in Buganda?

(d) Mention one danger faced by the early European explorers in Uganda.

Use the map below to answer question 42.



42(a) Identify the river marked M.

(b) How was the mountain marked E formed?

(c) Why does Victoria Nile flow from lake X to lake Y?

(d) Use letter A to show Uganda's neighbour that is also landlocked.


43(a) What is climate?

(b) Which climate is experienced in most parts of Uganda?

(c) State one factor that influences climate.

(d) Mention one area in Uganda that experiences semi – desert climate.

Use the diagram below to answer question 44.



44. (a) Write the words that are supposed to be in the area marked x x x x

(b) What does the item marked K stand for?

(c) Give one use of the item marked C to the people of Uganda.

(d) Identify the cash crop marked P on the diagram above.

45(a) Who was the leader of the C.M.S missionaries in Uganda?

(b) Why did Kabaka Muteesa I invite Christian missionaries to Buganda?

(c) Give one reason why Dr. Albert Cook is remembered in the history of Uganda.

(d) How did Kenneth Borup contribute to the economic development of Uganda?

46(a) What is **natural vegetation**?

(b) Which vegetation covers most parts of Uganda?

(c) Why are many national parks located in the Savannah vegetation?

(d) Give one way forests are important to farmers.

47(a) Who were the founders of Bunyoro – Kitara kingdom?

(b) Give any one economic contribution of the Bachwezi to the people of Uganda.

(c) How did the size of Bunyoro – Kitara contribute to its collapse?

(d) Mention one major disadvantage of the coming of the Luo to Bunyoro – Kitara empire.

48(a) What is the main duty of the Legislature?

(b) What title is given to the head of the executive arm of government in Uganda?

(c) What does a bill become when it has been signed by the president?

(d) What title is given to the secretary to parliament?

49(a) Which type of rule did the British colonialists use in Uganda?

(b) Mention one method the British colonialists used to establish their rule in Uganda.

(c) Why did Sir Gerald Portal raise the union Jack in Uganda?

(d) What name was given to the rebellion of the Sudanese soldiers against the British colonialists in Uganda?

50(a) How is L. Katwe economically important to Uganda?

(b) Name the mineral resource that has just been discovered in L. Albert.

(c) Mention the district in Western Uganda where limestone is mined.

(d) Why was the Uganda railway extended to Kasese in 1956?

51(a) Who was the Kabaka of Buganda during the signing of the 1900 Buganda Agreement?

(b) What name was given to the land given to the Kabaka and his people in that agreement?

(c) Mention one tax that the Buganda 1900 agreement introduced.

(d) Why was the Namirembe agreement of 1955 signed?

52(a) Give two ways lakes are economically important.

(i) _____

(ii) _____

(b) Give two ways waterfalls are economically important.

(i) _____

(ii) _____

53. **Match items in group A with those in group B correctly.**

A

Sir Hesketh Bell

Sir Philip Mitchell

Sir Andrew Cohen

Dr. Apollo Milton Obote

B

Exiled Sir Edward Muteesa II

First executive President of Uganda

First British governor in Uganda

Recommended Makerere to become a University

(i) Sir Hesketh Bell _____

(ii) Sir Philip Mitchell _____

(iii) Sir Andrew Cohen _____

(iv) Dr. Apollo Milton Obote _____

54(a) What was the main reason for the coming of the Arabs to Uganda?

(b) Why were the people of Uganda unhappy about the coming of the Arabs?

(c) Name the ships that the Arabs used to come to East Africa.

(d) Which items did the Arabs use as a form of money in East Africa.

55. **Our teacher earns 800,000 of monthly and spends it as follows.**

i. Rent – 150,000/=

ii. Food – 200,000/=

iii. Others – 200,000/=

iv. Saving – 250,000/=

(a) How much does the teacher spend monthly?

(b) What type of budget does the teacher use?

(c) How much does the teacher save in two months?

(d) Draw a diagram to show the teacher's budget.